

Question 1

Complete the calculations.

A. $7 \times 2 = \square$

B. $45 \div 5 = \square$

C. $90 \div 10 = \square$

D. $8 \times 5 = \square$

Question 2

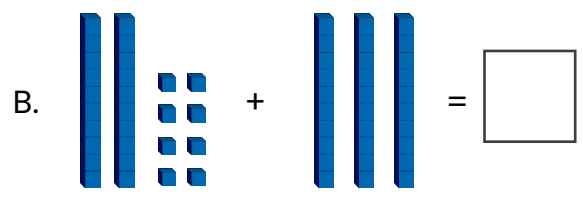
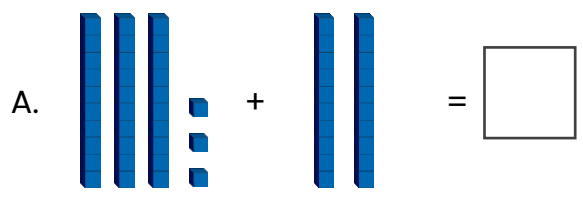
How many children like PE lessons?

Art	
Music	
PE	

Key: = 2 children

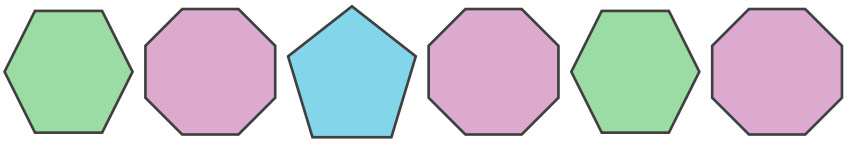
Question 3

Complete the calculations.



Question 4

Which shape will come next in the pattern?



- A. B. C.

Question 5

Which durations are longer than 15 minutes?

- A. quarter of an hour
- B. 60 seconds
- C. half an hour
- D. half past 4 to 5 o'clock

Question 1

Complete the calculations.

A. $7 \times 2 = 14$

B. $45 \div 5 = 9$

C. $90 \div 10 = 9$

D. $8 \times 5 = 40$

2C6

Question 2

How many children like PE lessons? 9

Art	
Music	
PE	

Key: = 2 children

2S1

Question 3

Complete the calculations.

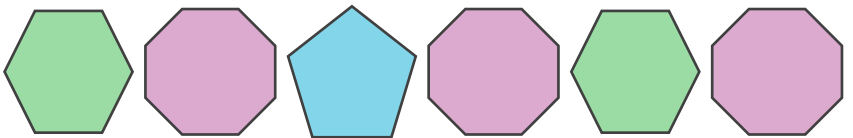
A. + =

B. + =

2C2b

Question 4

Which shape will come next in the pattern?



- A. B. C.

2P1

Question 5

Which durations are longer than 15 minutes?

- A. quarter of an hour
- B. 60 seconds
- C. half an hour
- D. half past 4 to 5 o'clock

2M4b