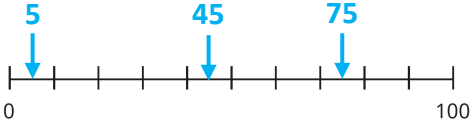
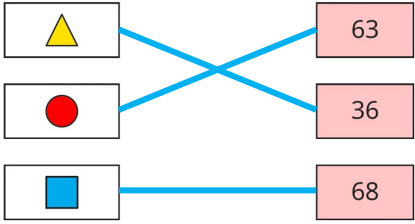
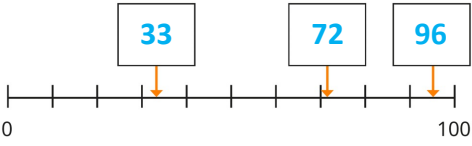
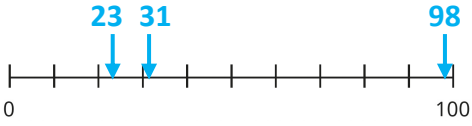


Y2 – Autumn – Block 1 – Step 11 – Estimate numbers on a number line Answers

Question	Answer
1	a) 5 b) 35 c) 65 d) 35
2	
3	 <p>Children can label the number line and decide which division each arrow is closer to.</p>
4	 <p>Children's answers may be slightly different.</p>
5	
6	Yes Both their arrows are more than halfway between 50 and 60, and so are reasonable estimates.
7	a) any number between 41 and 61, e.g. 56 b) any odd number between 14 and 41, e.g. 37