

### Question 1

Write the next two numbers in each sequence.

A. 10, 12, 14, \_\_\_\_, \_\_\_\_

B. 20, 18, 16, \_\_\_\_, \_\_\_\_

C. 54, 56, 58, \_\_\_\_, \_\_\_\_

D. 86, 84, 82, \_\_\_\_, \_\_\_\_

### Question 2

Choose the correct comparisons.

A. 15 cm < 32 cm

B. 18 m = 18 cm

C. 23 cm > 29 cm

D. 37 m > 27 m

### Question 3

Write these numbers in words:

40

18

51

Write these numbers in numerals:





one hundred


thirty-nine

twenty-six

### Question 4

How many children like melon and kiwi?

Fruit	Number of children
Apple	
Banana	
Melon	
Kiwi	

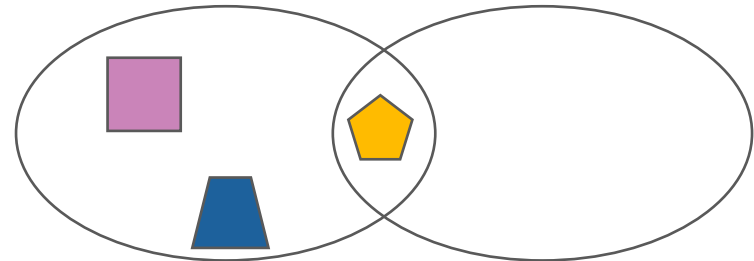
Key:  = 2 children

### Question 5

Which shape below belongs in the right-hand side of the Venn diagram?

4 vertices or more

regular shape



A.



B.



C.



### Question 1

Write the next two numbers in each sequence.

- A. 10, 12, 14, 16, 18
- B. 20, 18, 16, 14, 12
- C. 54, 56, 58, 60, 62
- D. 86, 84, 82, 80, 78

2N1

### Question 2

Choose the correct comparisons.

- A. 15 cm < 32 cm
- B. 18 m = 18 cm
- C. 23 cm > 29 cm
- D. 37 m > 27 m

2M1

### Question 3

Write these numbers in words:

- 40 = forty
- 18 = eighteen
- 51 = fifty-one





Write these numbers in numerals:


- one hundred = 100
- thirty-nine = 39
- twenty-six = 26

2N2a

### Question 4

How many children like melon and kiwi? 9

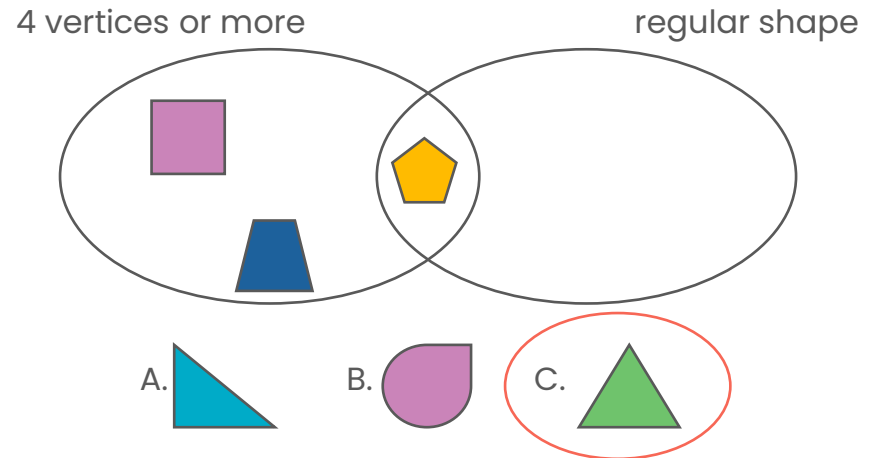
Fruit	Number of children
Apple	
Banana	
Melon	
Kiwi	

Key:  = 2 children

2S1

### Question 5

Which shape below belongs in the right-hand side of the Venn diagram?



2G1a