


Ordinal numbers

1 Here are some objects.



- a) Circle the 1st object.
- b) Underline the 3rd object.
- c) Tick the 2nd object.

2





- a) Which flower is coloured?

The flower is coloured.

- b) Colour the 5th flower.



3 Here are some shapes.



Complete the sentences.

The 2nd shape is a _____

The 4th shape is a _____

The star is the  shape.

The square is the  shape.

4 Draw the shapes in order.

- The last shape is a square.
- The 1st shape is a triangle.
- The 3rd shape is a circle.
- The 2nd shape is a rectangle.

