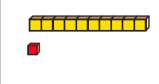








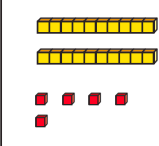
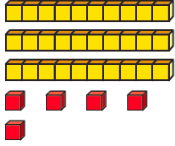
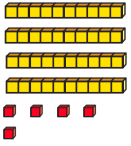







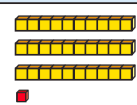
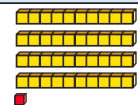








Question	Answer
----------	--------

1	a) Jo has <b>40</b> balloons. 50 b) 70 60
---	--

2	a)	<table border="1" style="width: 100%; text-align: center;"> <tr> <th style="width: 33%;">10 less</th> <th style="width: 33%;">Number</th> <th style="width: 33%;">10 more</th> </tr> <tr> <td></td> <td></td> <td></td> </tr> <tr> <td><b>11</b></td> <td>21</td> <td><b>31</b></td> </tr> </table>	10 less	Number	10 more				<b>11</b>	21	<b>31</b>
	10 less	Number	10 more								
											
<b>11</b>	21	<b>31</b>									
b)	<table border="1" style="width: 100%; text-align: center;"> <tr> <th style="width: 33%;">10 less</th> <th style="width: 33%;">Number</th> <th style="width: 33%;">10 more</th> </tr> <tr> <td></td> <td></td> <td></td> </tr> <tr> <td><b>25</b></td> <td><b>35</b></td> <td><b>45</b></td> </tr> </table>	10 less	Number	10 more				<b>25</b>	<b>35</b>	<b>45</b>	
10 less	Number	10 more									
											
<b>25</b>	<b>35</b>	<b>45</b>									
c)	<table border="1" style="width: 100%; text-align: center;"> <tr> <th style="width: 33%;">10 less</th> <th style="width: 33%;">Number</th> <th style="width: 33%;">10 more</th> </tr> <tr> <td></td> <td></td> <td></td> </tr> <tr> <td><b>21</b></td> <td><b>31</b></td> <td><b>41</b></td> </tr> </table>	10 less	Number	10 more				<b>21</b>	<b>31</b>	<b>41</b>	
10 less	Number	10 more									
											
<b>21</b>	<b>31</b>	<b>41</b>									

3	1	2	3	4	5	6	7	8	9	10
	11	12	13	14	15	16	17	18	19	20
	21	22	23	24	25	26	27	28	29	30
	31	32	33	34	35	36	37	38	39	40
	41	42	43	44	45	46	47	48	49	50
	51	52	53	54	55	56	57	58	59	60
	61	62	63	64	65	66	67	68	69	70
	71	72	73	74	75	76	77	78	79	80
	81	82	83	84	85	86	87	88	89	90
	91	92	93	94	95	96	97	98	99	100

Each set of numbers is in a column.

4	a) 10 more than 13 is <b>23</b> b) 10 less than 81 is <b>71</b> c) 10 more than <b>50</b> is 60 d) 10 less than <b>97</b> is 87
---	--

5	True
---	------