


Measure mass


1 What is the mass of each object?

a)




The mass of the banana is cubes.

b)



The mass of the ball is cubes.

c)




The mass of the cake is cubes.




2 Draw cubes to balance the scales.

a) The mass of the toy car is 6 cubes.



b) The mass of the sweets is 4 cubes.



3 Use cubes to measure the mass of objects in your classroom.

Complete this sentence for each object.

The mass of _____ is cubes.

Compare answers with a partner.

