


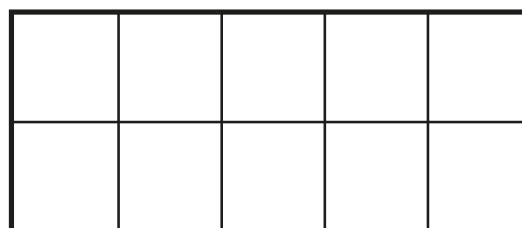
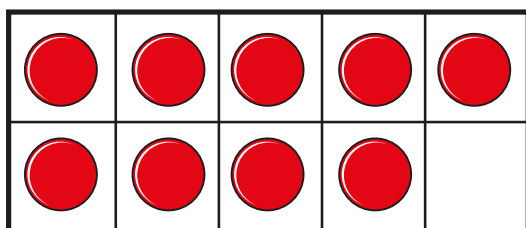
Add by counting on within 20



- 1 First, there are 9 children on the bus.
Then, 5 more children get on the bus.



How many children are on the bus now?
Complete the ten frames and the sentences.



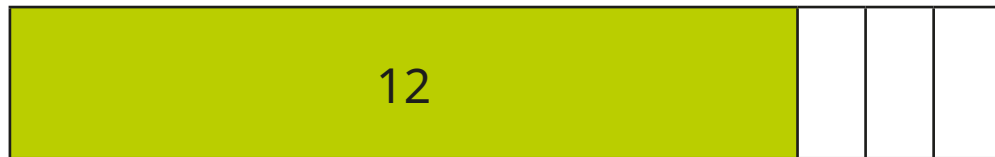
$$\square + \square = \square$$

Now, there are children on the bus.

2 Sam has 12 sweets.

Max gives her 3 more sweets.

How many sweets does Sam have now?

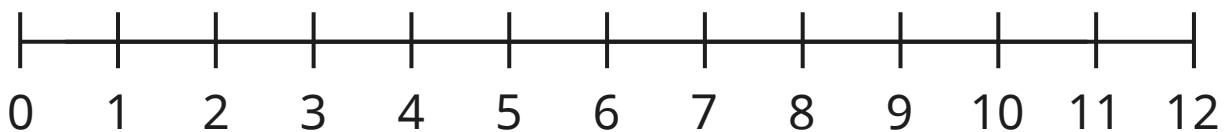


Sam has sweets now.

3 Kim has 7 coins.

Ron gives her 4 more coins.

How many coins does Kim have now?



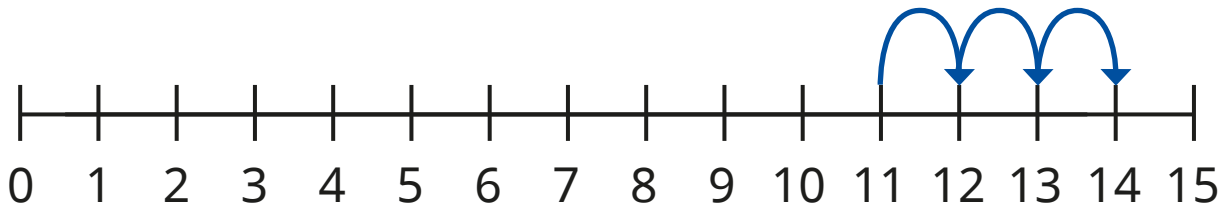
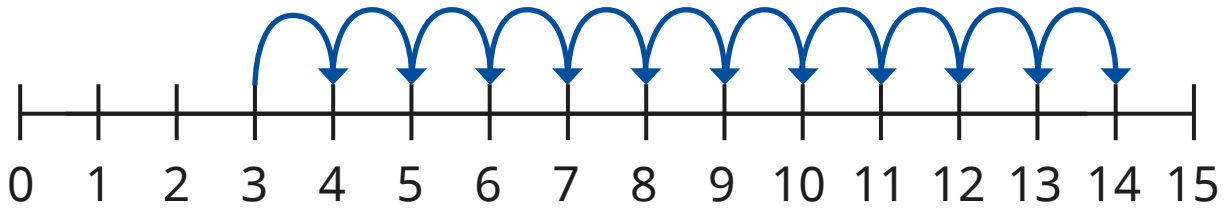
$$\boxed{} + \boxed{} = \boxed{}$$

Kim has coins now.





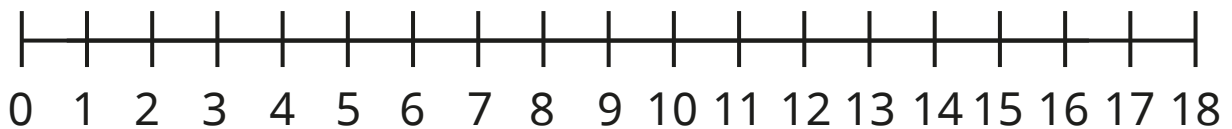
4 Each number line shows $3 + 11$



What is the same and what is different?

Use the number lines to work out the additions.

a) $2 + 13 =$



b) $4 + 9 =$

