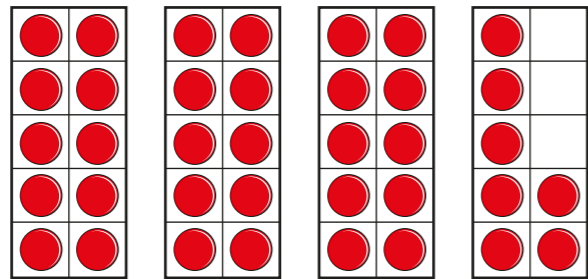


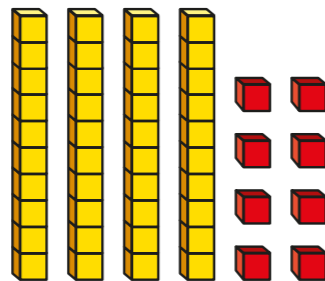
1 Complete the sentences to describe the counters.



There are tens and ones.

The number is

2 Complete the sentences to describe the base 10



There are tens and ones.

The number is

3 How many crayons are there?

a)

b)

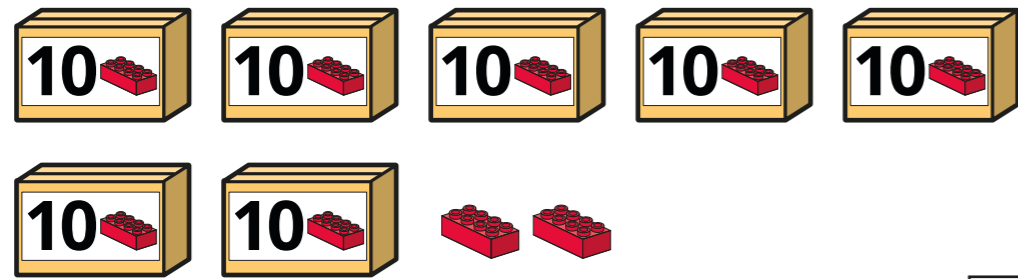
c)

4 How many candles are there?


How did you count them?




5 How many bricks are there?



6 How many balloons are there?




7 How many sweets are there?




How did you count them?

8 Tiny has some balloons.



I have 70 balloons.



Do you agree with Tiny? _____

Talk about it with a partner.

9 Jo needs 72 candles.



I have got these candles.



How many more candles does Jo need?

