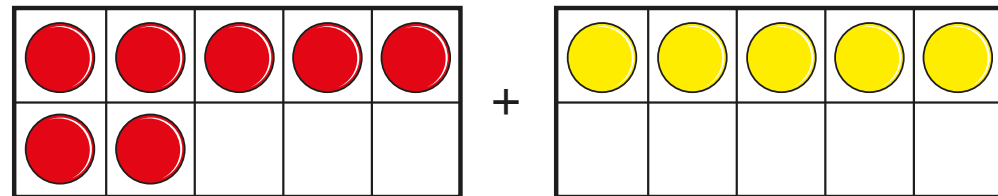


Add by making 10

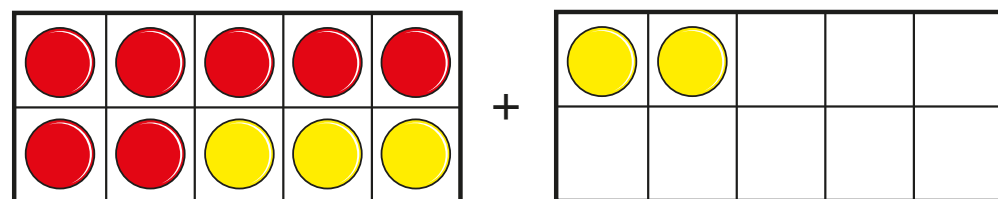


- 1 a) What addition is shown on the ten frames?



$$\square + \square$$

Jo moves some counters to help her add 7 and 5



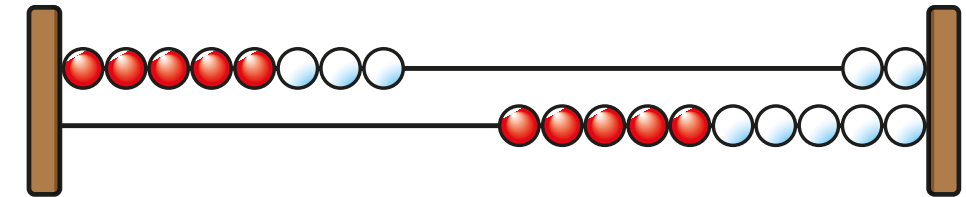
- b) Complete the addition shown now.

$$10 + \square$$

- c) Complete the addition.

$$7 + 5 = 10 + \square = \square$$

- 2 Mo uses a Rekenrek to work out $8 + 4$

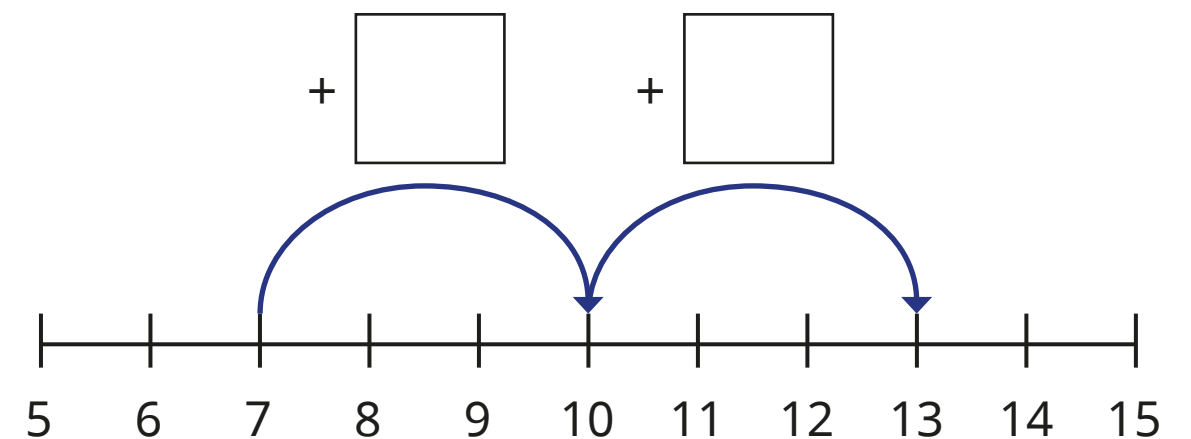


How many does Mo need to push to get to 10?

How many more does Mo need to push to find the answer?

What is $8 + 4$?

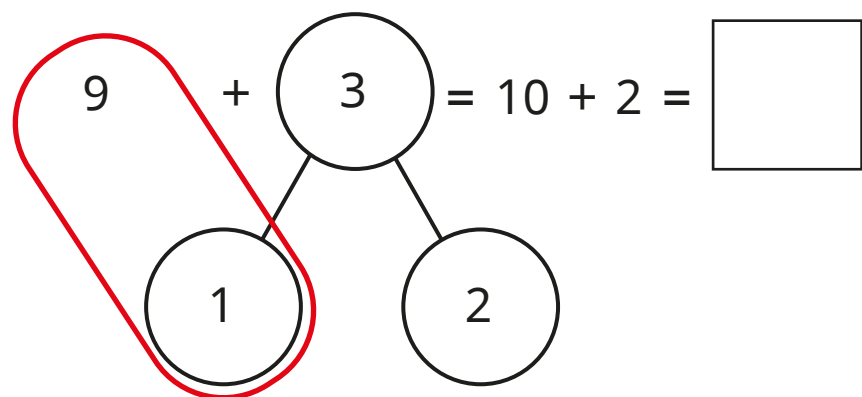
- 3 Sam uses a number line to work out $7 + 6$
Complete Sam's workings.



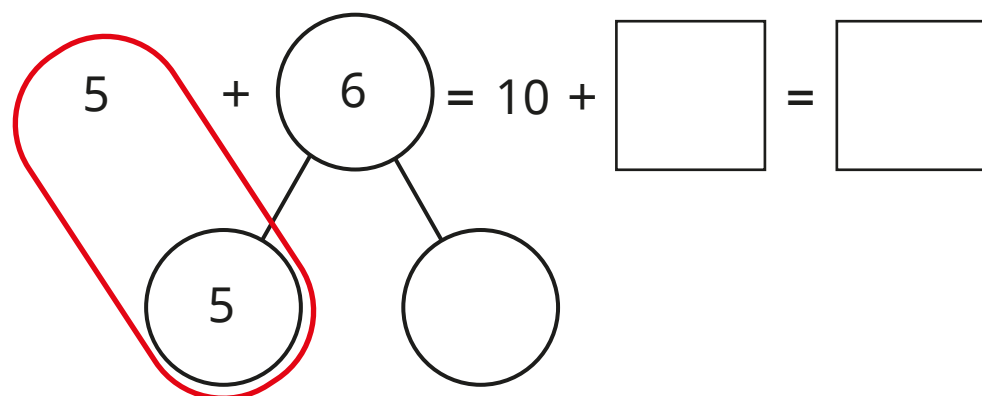
$$7 + 6 = \square$$

4 Use bonds to 10 to work out the additions.

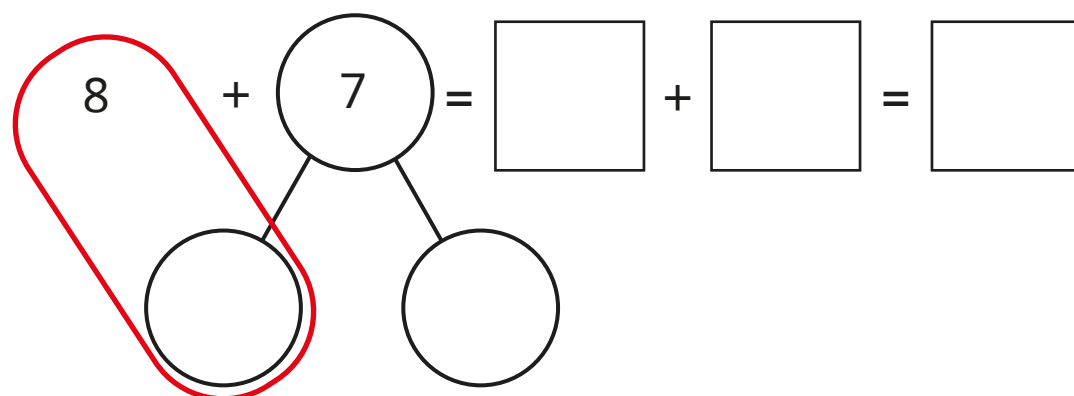
a)



b)



c)



5 Work out the additions.

a) $9 + 5 =$ []

c) [] $= 4 + 7$

b) $3 + 8 =$ []

d) [] $= 6 + 6$

6 Here are some digit cards.



Pick two cards.

a) What is the greatest total you can make?

b) What is the smallest total you can make?