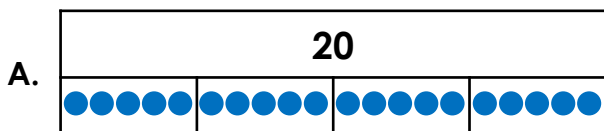



# Divide by 4

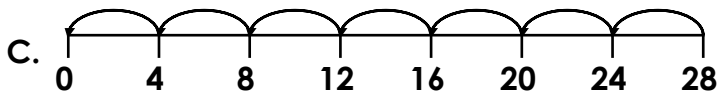
1. Match the representations to the calculations.



D.  $28 \div 4 = 7$



E.  $20 \div 4 = 5$

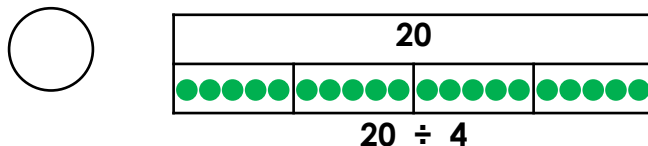
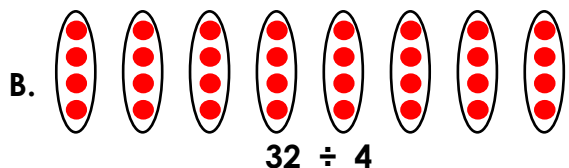
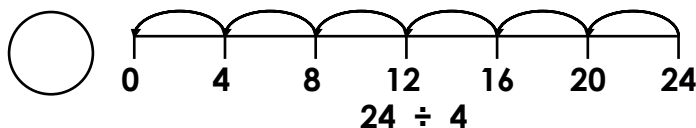
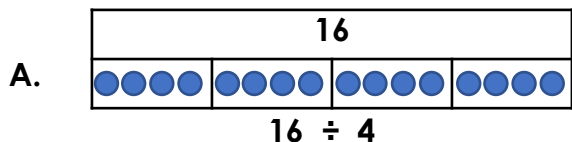


F.  $16 \div 4 = 4$



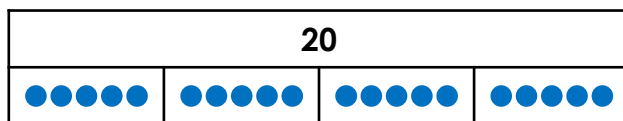
VF  
HW/Ext

2. Complete the statements using  $>$   $<$  or  $=$ .



VF  
HW/Ext

3. Sameena and Josh are discussing a calculation.



This bar model shows that dividing 20 by 4 is equal to 4.



Sameena



Josh

This bar model shows that dividing 20 by 4 is equal to 5.

Who is correct? Explain your answer.



RPS  
HW/Ext

**Homework/Extension**  
**Divide by 4**

**Developing**

1. A and E, B and F, C and D
2. A is < and B is >
3. Josh is correct. The bar model has been divided into 4 groups and there are 5 counters in each group because  $20 \div 4 = 5$ .