

# Hundreds

1. Find a path through the maze by counting forwards in hundreds from 100 to 1000.

Start

900	400	900	100	600	1,000	400	300	200	100
500	500	700	200	900	600	100	600	700	800
100	1,000	400	800	500	100	700	200	500	300
800	200	600	400	200	700	200	800	400	1,000
200	600	300	700	300	1,000	700	500	900	600

Finish



VF  
HW/Ext

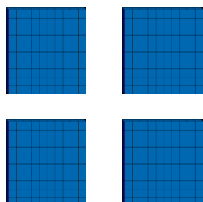
2. Match the numerals and the images.

700

400

600


A.



B.

H	T	O
● ● ● ● ● ●		

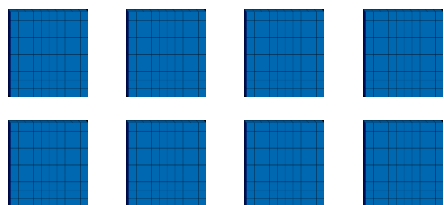
C.



VF  
HW/Ext

3. Kayden thinks that A, B and C all represent 800. Do you agree? Explain your answer.


A.



B.

H	T	O
	● ● ● ● ● ● ● ●	

C.



RPS  
HW/Ext

# Homework/Extension

## Hundreds

### Developing

1.

900	400	900	100	600	1000	400	300	200	100
500	500	700	200	900	600	100	600	700	800
100	1000	400	800	500	100	700	200	500	300
800	200	600	400	200	700	200	800	400	1000
200	600	300	700	300	1000	700	500	900	600

2. 700 – C, 400 – A, 600 – B

3. No, B represents 80, not 800.