
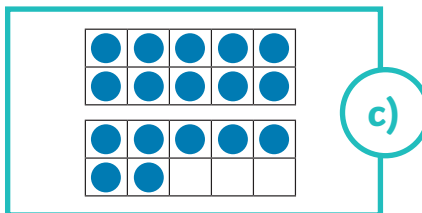
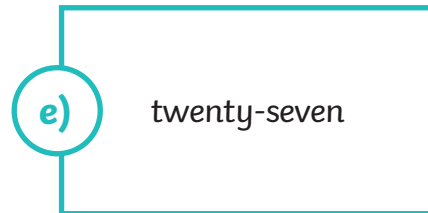
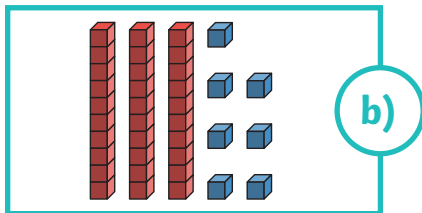
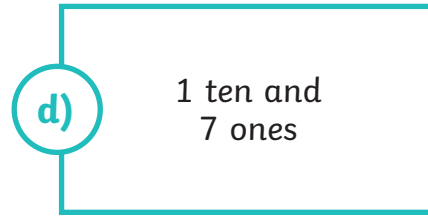



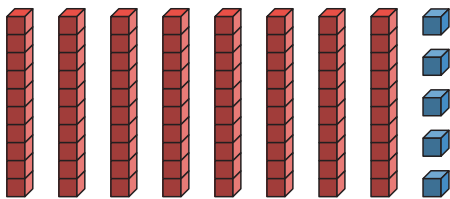
# Represent Numbers to 100



1) Match the representations to the correct numbers.



2) Complete the sentence to show the number being represented.



There are \_\_\_\_\_ tens and \_\_\_\_\_ ones.

The number is \_\_\_\_\_.

3) Identify the number being described and draw a representation of it.

I have 6 tens and 3 ones. My number is \_\_\_\_\_.

I have 6 ones and 3 tens. My number is \_\_\_\_\_.