

Telling the Time to 5 Minutes

Match the clock to the correct time.


20 minutes to 7

20 minutes past 2


10 minutes past 8

10 minutes to 8

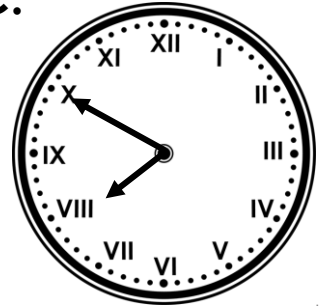
A.



B.




C.



VF
HW/Ext

Tick the time that each clock shows.

A.




5 minutes to 7

5 minutes to 8

5 minutes past 7

B.



10 minutes to 3

Quarter past 3

Quarter to 3

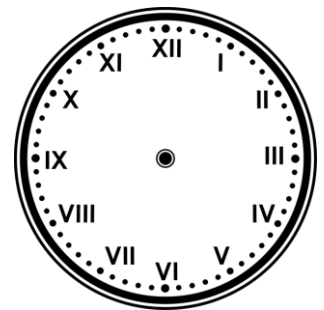


VF
HW/Ext

6. Julie is explaining where the clock hands should be to show the time 10 minutes to 9. Is she correct? Use the blank clock to help you explain your answer.



The minute hand is close but not on the 9 and the hour hand is on the number 10.



RPS
HW/Ext

Homework/Extension
Telling the Time to 5 Minutes

Expected

4. A. 20 minutes past 2, B. 20 minutes to 7, C. 10 minutes to 8
5. A. 5 minutes to 7, B. quarter to 3
6. Julie is incorrect as the minute hand should be on the Roman numeral 10 and the hour hand should be close to the Roman numeral 9. Answer should include drawn hands on the clock.