

Adding Money

1. Find the totals.



VF


4. Tracy wants to buy two items from the list below.

Item	Price
apple	20p
pear	34p
orange	39p
banana	60p

If Tracy's total is less than 60p, what two items could she have bought?

PS

2. Add the amounts together and circle the correct total.



- A. £9 B. 12 pounds C. £11

VF

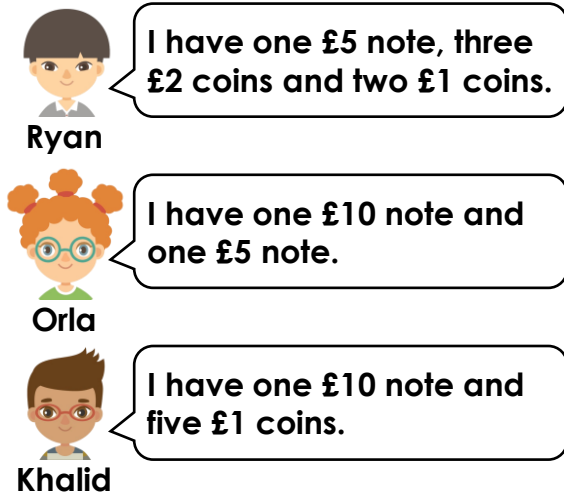
5. Ben has the money below. He knows that up to four copper coins are hidden.



What could his total be? Find three possibilities.

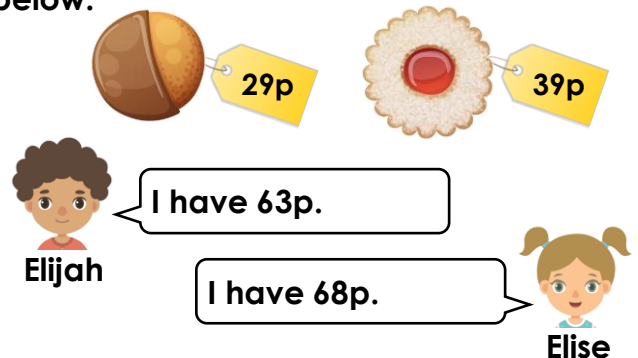
PS

3. Which two children have the same amount of money?



VF

6. Elijah and Elise want to buy the items below.



Who has enough money to buy both items? Explain why.

R