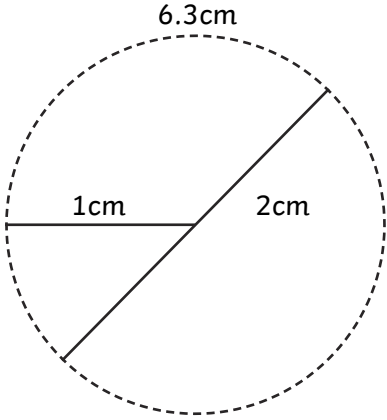
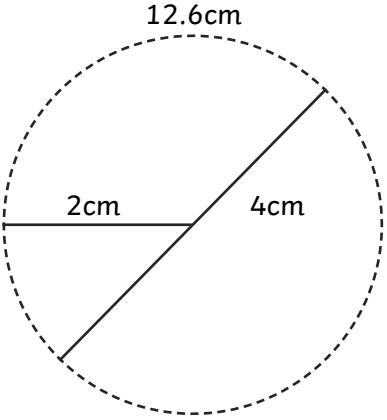
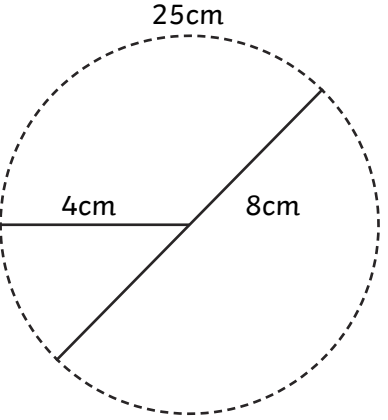
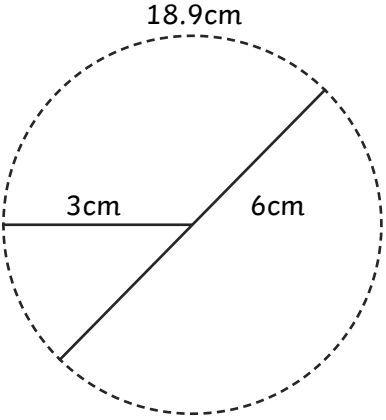


# Circle Fact Files

Look carefully at the measurements of each circle. Can you spot any patterns or relationships between the radius, diameter and circumference?

			
<p>Radius = 1cm Diameter = 2cm Circumference = 6.3cm</p>	<p>Radius = 2cm Diameter = 4cm Circumference = 12.6cm</p>	<p>Radius = 4cm Diameter = 8cm Circumference = 25cm</p>	<p>Radius = 3cm Diameter = 6cm Circumference = 18.9cm</p>