


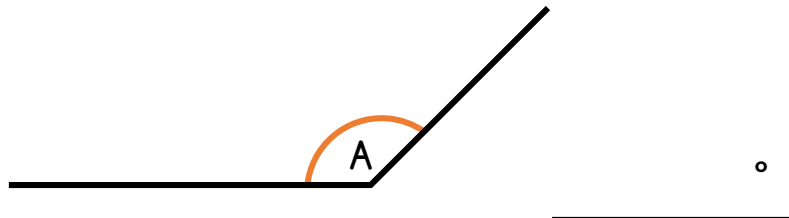
Name \_\_\_\_\_

1 Sort the angles into the table.



| Reflex | Acute | Right angle | Obtuse |
|--------|-------|-------------|--------|
|        |       |             |        |

2 Measure the size of angle A.



Is your answer sensible? Explain why.



2 marks

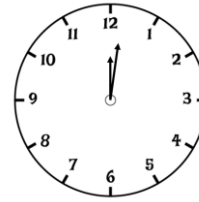


1 mark



1 mark

3 How many degrees does the minute hand move in 15 minutes?

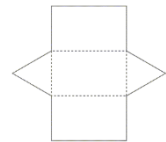
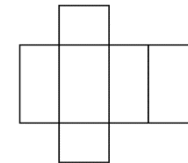
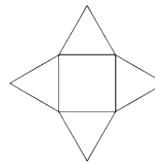
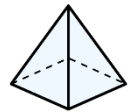
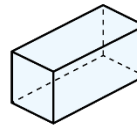


\_\_\_\_\_ °



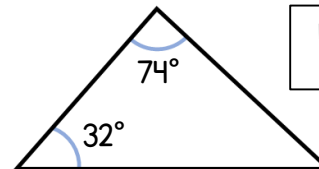
1 mark

4 Match the 3D shapes to their net.



2 marks

5 Calculate the missing angle in the triangle.



Not drawn  
to scale.

\_\_\_\_\_ °



1 mark

What type of triangle is this?

\_\_\_\_\_



1 mark

